

Sequência numérica:

19 - 32 - 35 - 64 - 72 - 84 - 12 - 6 - 59 - 60

Quantidade de passos realizados:

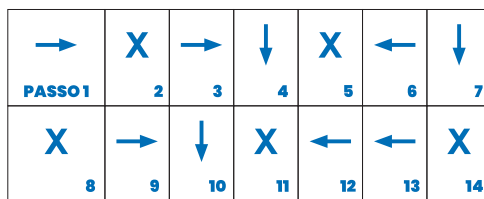
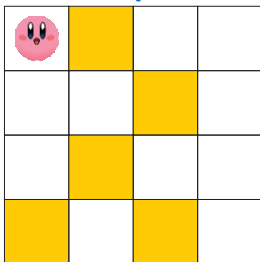
10

Qual é a soma dos números que completam a sequência do caminho?

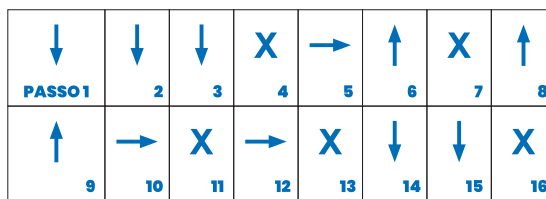

443

8º e 9º Ano.

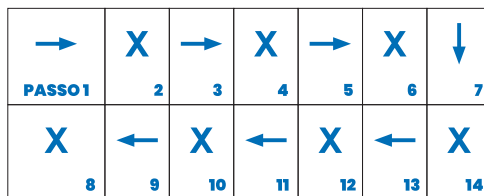

COMECE POR AQUI



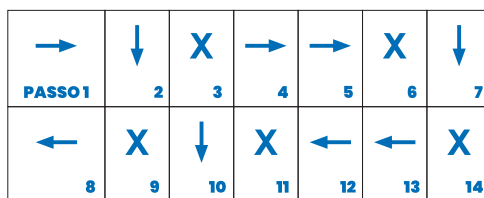
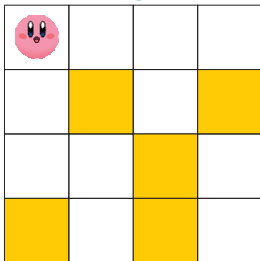
COMECE POR AQUI



COMECE POR AQUI



COMECE POR AQUI



COMECE POR AQUI

